

DATE: 16.4.2020

E-CONTENT (HOME ASSIGNMENT)

CLASS- II

SUBJECT- MATHS

DATE 16.4.20  
PAGE :

CLASS - 2nd SUB - MATHS

Do the following sums in fair notebook.

Pg 40

- 11) Vikas is 39 years old. Ritu is five years older than vikas. What is Ritu's age?

Vikas's age = 39 years  
Ritu is older = 05 years  
Ritu's age = \_\_\_\_\_ years

Ans

DATE: 16.4.2020

DATE : / / \*  
PAGE : \_\_\_\_\_

12. There are 238 women, 275 men and 75 children in a cinema hall. How many persons are there in cinema hall?

13. What number is 324 more than 779?

$$779 + 324$$

$$\begin{array}{r} 779 \\ + 324 \\ \hline \end{array}$$

Ans.

DATE: 16.4.2020

DATE : \_/ \_/ \_  
PAGE : \_\_\_\_\_

14. Fill in the blanks.

d)  $6 + 0 = \underline{\quad}$

e)  $166 + 0 = \underline{\quad}$

f)  $11 + \underline{\quad} = 11$

EX - 2.1

a) 
$$\begin{array}{r} \text{Th} \quad \text{H} \quad \text{T} \quad \text{O} \\ 2 \quad 3 \quad 2 \quad 4 \\ + 1 \quad 5 \quad 4 \quad 4 \end{array}$$

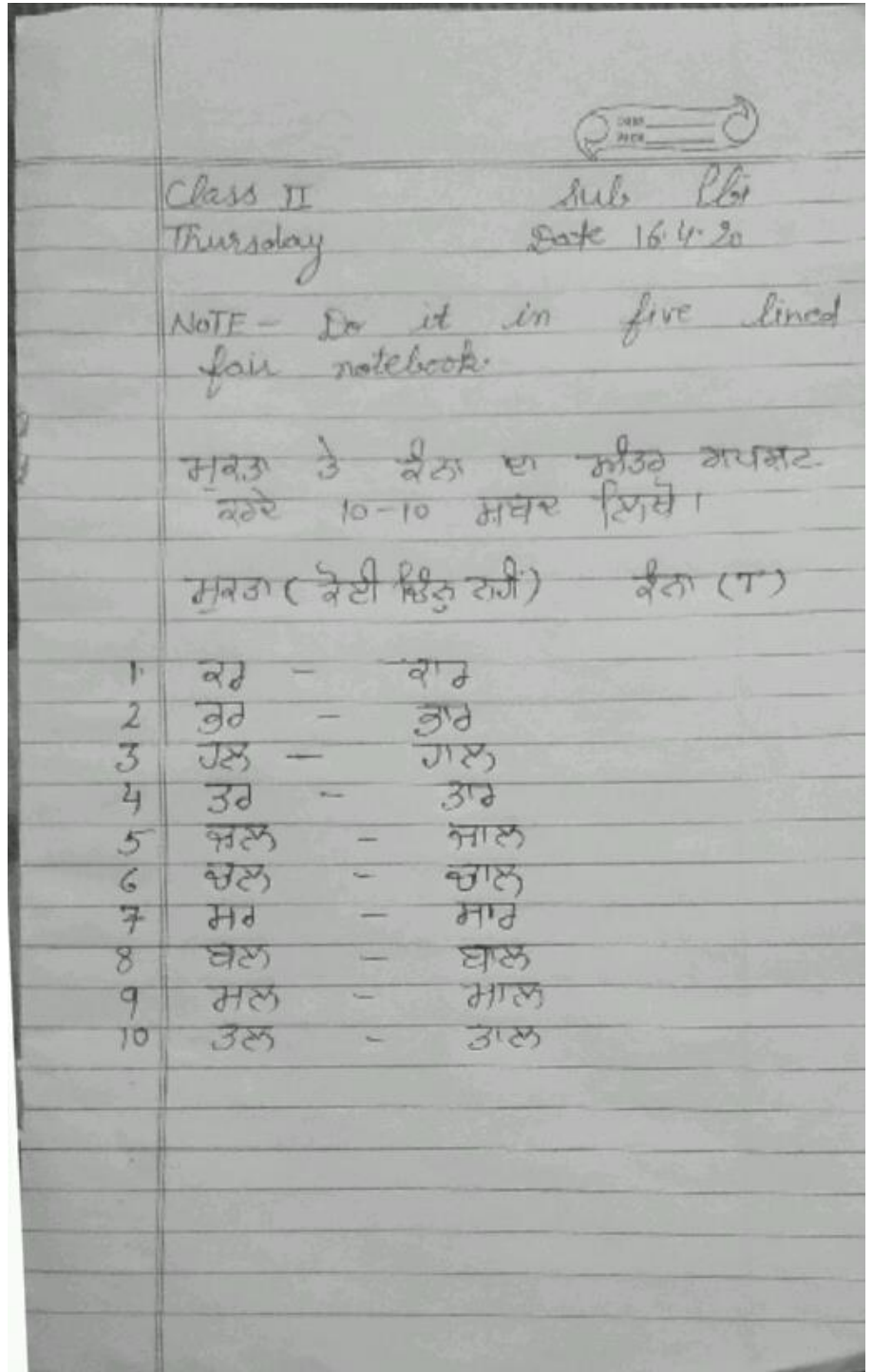
Ans

b) 
$$\begin{array}{r} \text{Th} \quad \text{H} \quad \text{T} \quad \text{O} \\ 4 \quad 2 \quad 5 \quad 5 \\ + 4 \quad 5 \quad 3 \quad 4 \end{array}$$

Ans

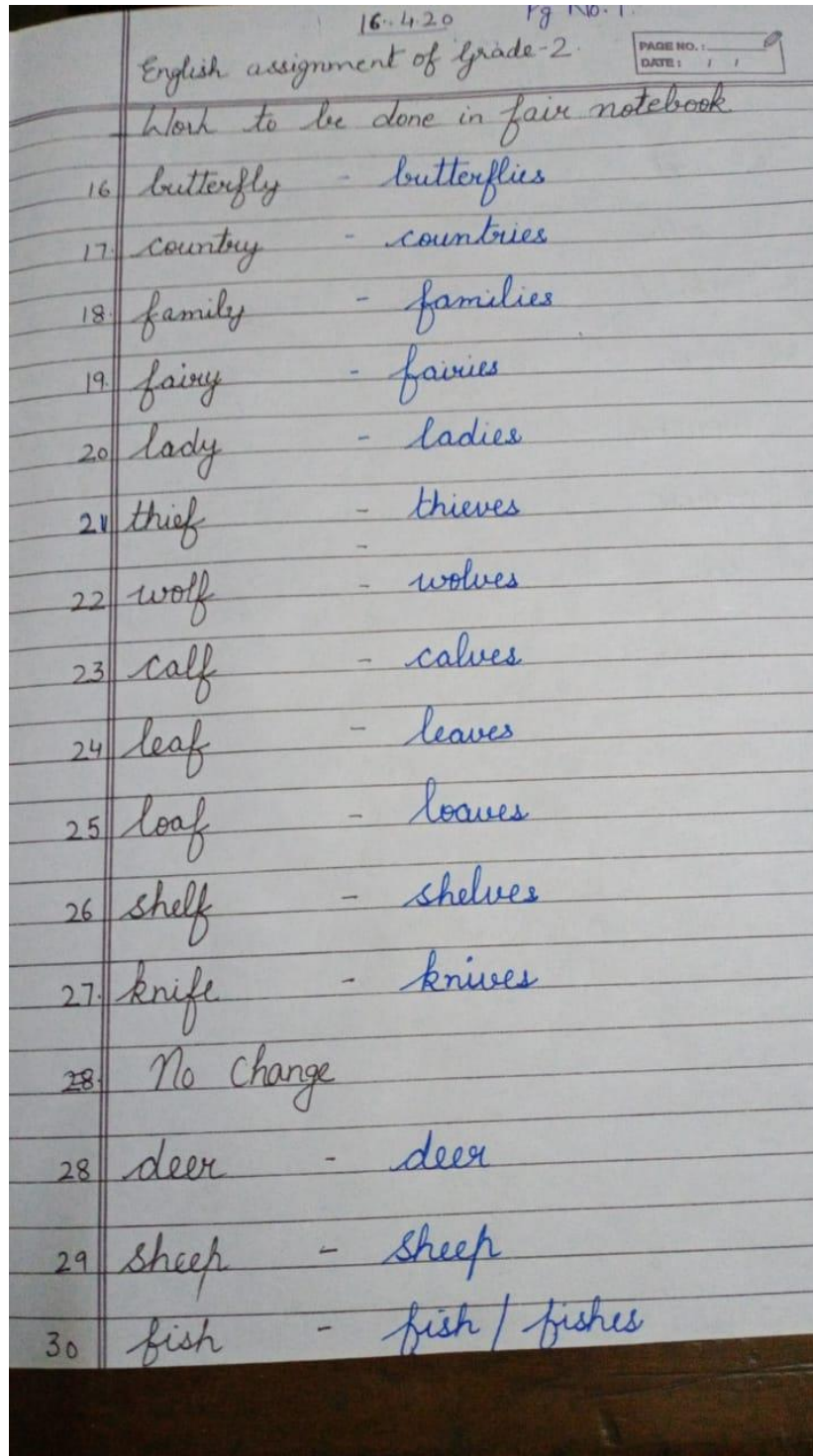
DATE: 16.4.2020

SUBJECT- PUNJABI

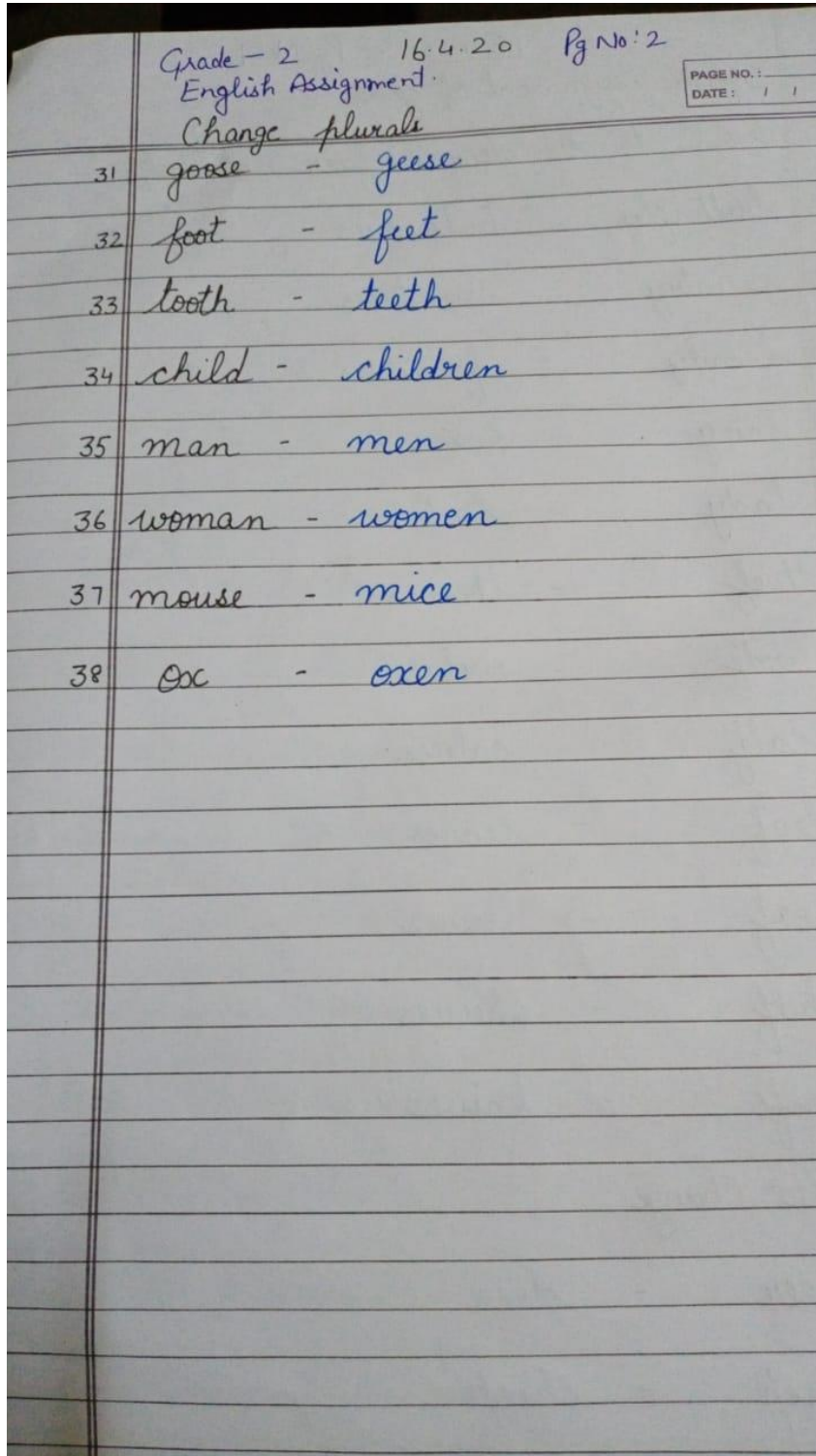


DATE: 16.4.2020

SUBJECT- ENGLISH



DATE: 16.4.2020



<https://youtu.be/WdT3BHR5twM>