

SUBJECT : ENGLISH PART-I**Learning Grammar** Structure and Usage

Action words tell us what a person or thing is doing. Eat, sleep, play, write, sing, dance – these are all 'action words'.




Now, circle the correct action words in the given sentences:

1. My friends (**play/came/eat**) to my house last week.
2. I (**eat/talk/dance**) breakfast every day.
3. We (**dance/work/play**) in the playground after school.

For further exercises refer to 'Grammar Trove' page 48.

Write Well Composition Skills

Use words in place of the pictures to describe a rainy day:

1. The  _____ was shining in the sky.
2. There was a  _____ flying in the sky.
3. Suddenly it started to  _____.

ASL Assessment of Speaking and Listening

Form teams to play the game 'complete the sentence'. Choose a topic, for example— A Rainy Day. One student will start with a word like 'today', then the next student says 'we', then the next one says 'went' and so on. The team that forms the best sentence will win.

Fun Zone Cross-Curricular Links

Write names of seasons in your notebook. Also, write names of two things used in the particular season.

English
Class I

Date 24.4.20

Day - Friday

Read carefully and answer the exercises.

Pg 17

Answer key

I Circle the correct action words

1) came 2) eat 3) play

II Use words in place of the pictures to describe a rainy day.

1) sun 2) bird 3) rain

Fun zone 1) Summer - fan, cotton clothes, ice cream, shakes, cooler, A-C

Hints → 2) Winter - woolen clothes, gloves, heater, hot drinks, dry fruits.

Write in fair notebook. 3) Rainy - umbrella, gumboots, raincoat

Name of seasons and 2 things used in each season. 4) Autumn → pie, coffee, tea, shawl, scarf, blanket

DATE : 24-APRIL-20

SUBJECT : MATHS

Add Sums

$$\begin{array}{r} \textcircled{1} \cdot \quad \text{T} \ \emptyset \\ \quad \quad 2 \ 2 \\ + \quad \quad 1 \ 3 \\ \hline \quad \quad 3 \ 5 \end{array}$$

Ans = 35

$$\begin{array}{r} \textcircled{2} \cdot \quad \text{T} \ \emptyset \\ \quad \quad 1 \ 5 \\ + \quad \quad 4 \ 1 \\ \hline \quad \quad 5 \ 6 \end{array}$$

Ans = 56

$$\begin{array}{r} \textcircled{3} \cdot \quad \text{T} \ \emptyset \\ \quad \quad 3 \ 3 \\ + \quad \quad 1 \ 4 \\ \hline \quad \quad 4 \ 7 \end{array}$$

Ans = 47

$$\begin{array}{r} \textcircled{4} \cdot \quad \text{T} \ \emptyset \\ \quad \quad 2 \ 6 \\ + \quad \quad 2 \ 2 \\ \hline \quad \quad 4 \ 8 \end{array}$$

Ans = 48

DATE : 24 APRIL 20

SUBJECT : MATHS-2

$$\begin{array}{r} \textcircled{1} \quad \cdot \quad \text{T} \quad \theta \\ \quad \quad 3 \quad 4 \\ + \quad 1 \quad 1 \\ \hline \hline \end{array}$$

Ans =

$$\begin{array}{r} \textcircled{2} \quad \cdot \quad \text{T} \quad \theta \\ \quad \quad 7 \quad 5 \\ + \quad 1 \quad 2 \\ \hline \hline \end{array}$$

Ans =

$$\begin{array}{r} \textcircled{3} \quad \cdot \quad \text{T} \quad \theta \\ \quad \quad 6 \quad 1 \\ + \quad 1 \quad 3 \\ \hline \hline \end{array}$$

Ans =

$$\begin{array}{r} \textcircled{4} \quad \cdot \quad \text{T} \quad \theta \\ \quad \quad 1 \quad 2 \\ + \quad 1 \quad 2 \\ \hline \hline \end{array}$$

Ans =

H.W. → Do this pg in fair notebook.

WATCH VIDEO : <https://www.youtube.com/watch?v=Cl-3i9ylifA>

DATE : 24 APRIL 20

SUBJECT : COMPUTER

ASSIGNMENT OF COMPUTER

CHAPTER: 2

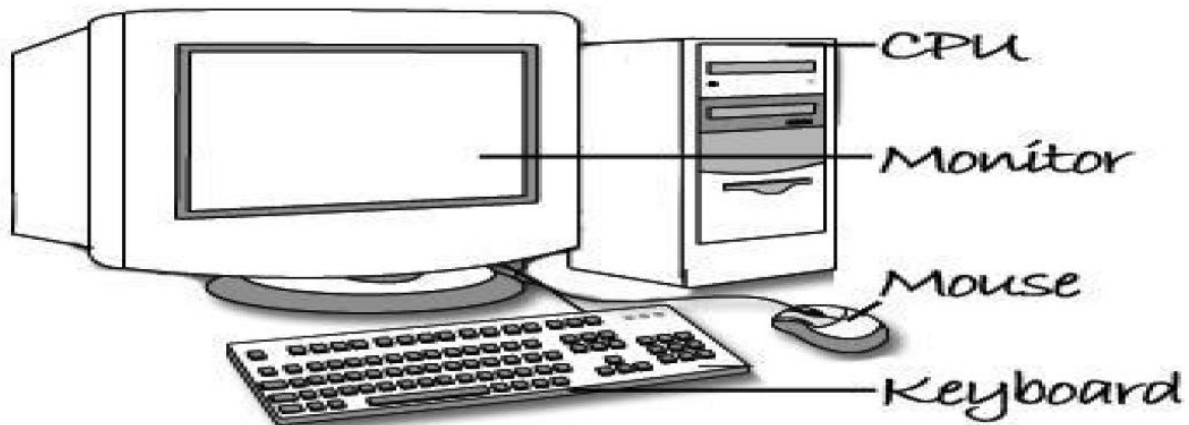
CLASS: Ist

CHAPTER: PARTS OF A COMPUTER

As we know that body has different part like eyes, nose, ears, arms, legs etc.

In the same way computer too has different parts to perform different functions

4 Main Parts of a Computer



➤ **MONITOR**

1.It looks like a television

2.On the monitor we can see what we are doing

➤ **CPU**

1.It stands for central processing units

2.It is the brain of computer

Question/Answers

Q1. Name 4 main parts of computer.

Ans. 1.Monitor

2.CPU

3.Keyboard

4.Mouse

Q2.Name the part of computer which looks like television.

Ans. Monitor

Q3. What is the full form of CPU?

Ans. Central processing unit.

Q4. Which is the important part of computer?

Ans. CPU

Q5. Which part is known as the brain of computer?

Ans. CPU

WATCH VIDEO : https://youtu.be/O_6R2B8ongk

DATE : 24-04-20

SUBJECT : GK

Expt. No. Date

Page No 24.4.20

CLASS-I **ASSIGNMENT No.3** **SUB - G.K**

L-3 **Birds Around us**

Fill in the blanks:-

1. _____ male bird has coloured feathers
2. _____ bird can fly back and forth
3. A _____ is a flightless bird.
4. _____ bird eats with its head upside down
5. _____ bird fly from the north pole to south pole.
6. _____ bird feeds by drilling into the tree barks.

Teacher's Signature : _____

WATCH VIDEO : <https://youtu.be/VfNjpbZPVZc>