





SUBJECT : ENGLISH PART-I


Revision of This, That, These, Those


1) _____ is a kite. → 


2) _____ is a book. 


3) _____ are cups. → 

4) _____ are spoons. 

5) _____ is a doll. 

6) _____ is a bat. → 

7) _____ are mangoes. 

8) _____ are stars. → 

Note → The above sentences are just for revision. They are not to be done in the fair notebook.

This, That, These and Those

7

A We use **this** or **that** to point the things.
This is used for a person, place or thing that is **near** us.
That is used for a person, place or thing that is **far** from us.

Exercise 1 • The things in the pictures are near you. Look at the pictures and write sentences like : This is a / an



1. This is a goat ➤



◀ 2. This is _____ .

3. This is _____ ➤



◀ 4. This is _____ .



5. This is _____ ➤

Exercise 2 • The things in the pictures are not near you. Look at the pictures and write sentences like : That is a / an



1. That is a boat ➤



◀ 2. _____ .

3. _____ ➤



◀ 4. _____ .

5. _____ ➤



B We use

• This ... for one

• That ... for one

• These ... for more than one

• Those ... for more than one

Exercise 1 Fill in the blanks with **this, that, these or those**.



I am Rahul. This is my room. I like to draw and colour pictures. I

use _____ crayons and _____ colour pencils to make my

drawings. When I complete a drawing, I hang it on _____ wall. I

have made all _____ drawings on the wall. I am fond of stories also.

All _____ books on the shelf are storybooks. Can you see

_____ DVDs ? They also tell stories.

DATE : 27-APRIL-20

SUBJECT : MATHS

H.W. → Do Revision work of Add sums and
Do counting 641 - 670 in Rough
Notebook.

Add Sums

$$\begin{array}{r} \textcircled{1} \quad . \quad T \quad \theta \\ \quad \quad 3 \quad 9 \\ + \quad 5 \quad 0 \\ \hline \end{array}$$

Ans =

.

$$\begin{array}{r} \textcircled{2} \quad . \quad T \quad \theta \\ \quad \quad 7 \quad 1 \\ + \quad 2 \quad 6 \\ \hline \end{array}$$

Ans =

$$\begin{array}{r} \textcircled{3} \quad . \quad T \quad \theta \\ \quad \quad 2 \quad 2 \\ + \quad 2 \quad 2 \\ \hline \end{array}$$

Ans =

$$\begin{array}{r} \textcircled{4} \quad . \quad T \quad \theta \\ \quad \quad 4 \quad 8 \\ + \quad 4 \quad 0 \\ \hline \end{array}$$

Ans =

DATE : 27 APRIL 20

SUBJECT : EVS



Monday

www.yoursworld.com

Date : 27.4.20

Page : E.V.S Grade 1.

Topic : My Family Assignment

Fun time

Tick (✓) the right answer

1. How many members are there in your family?

3 4 5 6 7 8

2. What do you call your family?

small big

List five things you do to help at home.

1.

2.

3.

4.

5.

Enjoy !! Do this activity in your fair notebook.

Wait for the next assignment till then bye