

*Home
Assignment
Class IV*

Day 6

11 - 04 - 2020

Sub: English

Serial No. ENGLISH Class IV Day 6.

Dated

Date 11 April 2020

Q1 Write an application to the Principal to change your section. Give proper reason.

Q2 Write an application to your Class Incharge to make you the monitor.

Sub: Math

Pg. 1

CLASS IV (MATHS) CHAPTER 1 LOOK BACK

Page No. _____
Date: 11.04.20

ASSIGNMENT

Q. 36 Convert to ML

i) 6 l 300 ml

$$1 \text{ l} = 1000 \text{ ml}$$

$$6 \text{ l} = 6 \times 1000 = 6000 \text{ ml}$$

$$6 \text{ l } 300 \text{ ml} = 6000 \text{ ml}$$

$$+ 300 \text{ ml}$$

$$\underline{6300 \text{ ml}}$$

$$\text{Ans} = 6300 \text{ ml}$$

H.W.

ii) 60 l 450 ml

Q. 37. i) Convert to l 16500 ml

$$1000 \text{ ml} = 1 \text{ l}$$

$$1 \text{ ml} = \frac{1}{1000} \text{ l}$$

$$\frac{16500}{1000}$$

$$16500 \text{ ml} = \frac{1}{1000} \times 16500 \text{ l}$$

$$= 16.500 \text{ l}$$

$$= \underline{16 \text{ l } 500 \text{ ml}}$$

H.W.

ii) 4035 ml

iii) 72540 ml

$$\begin{array}{r} 1000 \overline{) 16500} \\ \underline{1000} \\ 6500 \end{array}$$

$$\underline{6000}$$

$$\underline{500}$$

$$\underline{500 \text{ ml}}$$

Q. 38. Add. (H.W)

$$\begin{array}{r} \text{l} \quad \text{ml} \\ 644 \quad 364 \\ + 129 \quad 589 \\ \hline \end{array}$$

Q. 39 Subtract (H.W)

$$\begin{array}{r} \text{l} \quad \text{ml} \\ 948 \quad 447 \\ - 633 \quad 069 \\ \hline \end{array}$$

Q. 40 Multiply (H.W)

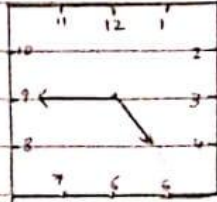
i)

$$\begin{array}{r} \text{l} \quad \text{ml} \\ 326 \quad 112 \\ \times \quad 6 \\ \hline \end{array}$$

ii)

$$\begin{array}{r} \text{l} \quad \text{ml} \\ 418 \quad 222 \\ \times \quad 4 \\ \hline \end{array}$$

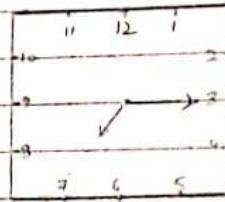

Q.41 Draw a clock showing time
i) Quarter to 5



H.W.
ii) Twenty min past 12

This is a clock showing time Quarter to 5 i.e. 4:45

Q.42 Write the time shown by clock.
i) ii) H.W.



This is a clock showing time 2:40
or 40 min past 2
or 20 min to 3

Q.43 Write a.m. or p.m.

i) Half past 6 in the morning = 6:30 a.m.

ii) Quarter past 8 in the evening = 8:15 p.m.

H.W. iii) Quarter to 8 in the morning

iv) Half past 8 in the evening.

Visit the following links:

→ <https://www.youtube.com/watch?v=K1mYpyFDcbl&feature=youtu.be>

→ <https://www.youtube.com/watch?v=qnEb13n6aJg&feature=youtu.be>