

DATE :- 1-5-2020

Class - III

DAY :- FRIDAY

SUBJECT- ENGLISH

CLASS-III
SUB- ENGLISH

Page-① only

1.5.20

Revision- Articles

FRIDAY

I. Fill in the blanks with a, an or the

- i. I have _____ inkpot.
- ii. _____ sun rises in the east.
- iii. It is _____ umbrella.
- iv. I saw _____ owl in the tree.
- v. She has _____ pencil.
- vi. _____ Taj Mahal is in Agra.
- vii. He is _____ honest man.
- viii. _____ earth is round.
- ix. He is _____ best boy in the class.
- x. You are _____ beautiful girl.

Note: Do this exercise in proper notebook

SUBJECT- MATHS

Class III

Sub: Maths

Date: 1.5.20

Q1. Write Roman numerals from 51-100

Q2. Which is greater?

(a) $XXII$ or XIX

(b) $XXXVIII$ or XL

Q3. Solve and write the answer in Roman numbers.

(a) $IV + XXI =$

(b) $XXXIII - XIX =$

Q4. Write Hindu Arabic no's for

(a) XLV (b) $XXIX$ (c) $XVIII$

Q5. Arrange the no's and add

(a) $375 + 283 + 54$

(b) $389 + 712$

Do the sums in rough copy
also memorize tables 0-12 thoroughly

SUBJECT- COMPUTER

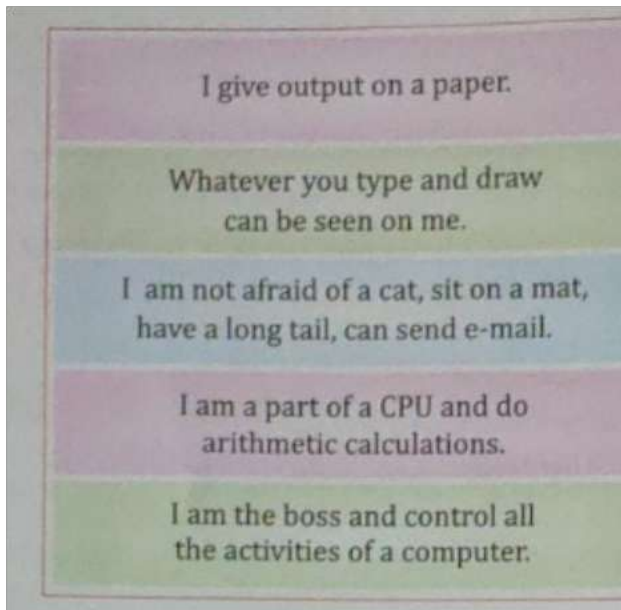
- To see the video please follow the link:- <https://youtu.be/Z9musG76AjE>

ASSIGNMENT- 4

Q1. Write full form of the following:

- A. IPO _____ B. VDU _____
C. CU _____ D. MU _____
E. CPU _____ F. IQ _____
G. ALU _____ H. LCD _____

Q2. WHO AM I ?



Q3. Fill in the blanks:

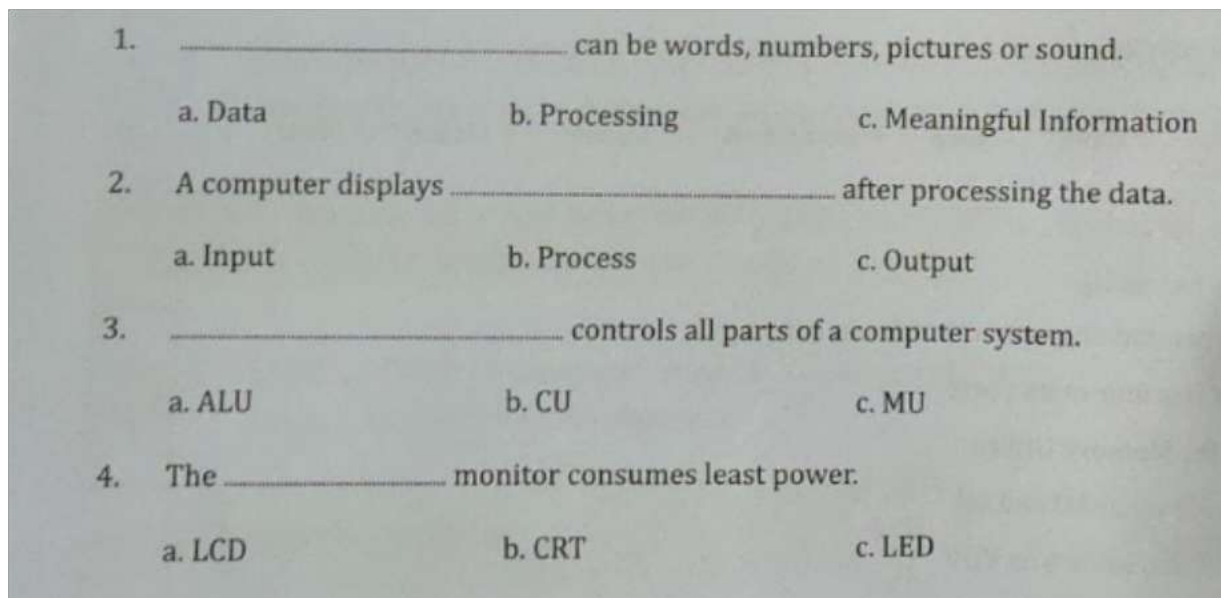
Hints:-

CPU	Store	Data	Insructions	Monitor	Mouse	VDU
-----	-------	------	-------------	---------	-------	-----

1. A computer works with _____ and _____.

2. A computer can_____a large amount of information.
3. A_____displays all the work that we do on a computer.
4. A _____is used to point, select and move any object on the computer screen.
5. A _____does all the calculations and displays the result on the monitor.
6. A monitor is also known as_____.









Q4. Multiple choice question.



Q5 . Application Based Questions:

1. Mary is reading the soft copy of a letter. Which part of a computer is she using?
2. Supriya wants to do painting on a computer. Which computer device will you suggest her to use for making a colorful drawing?
3. Saurabh's mother has asked him to take out 50 copies of birthday invitation letter. Which device should he use to get the hard copy?

Q6. Complete the table using the hints given below.

MACHINE		INPUT	PROCESSING	OUTPUT
	Microwave	Rice and Water	Ready to eat
	Juicer	Carrots, Oranges	Churning & Extracting Juice
	Food processor	Cutting the Vegetables
	Calculator	Numbers and Operating Symbols	Calculated Answer
	Washing Machine	Washing Clothes	Clean Clothes
	Toaster	Slices of Bread	Heating & Baking
	Music System	Spinning	Music & Songs
	Water Purifier	Plain Water	Clean Drinking Water

HINTS Ready Juice of Carrots and Oranges, Big pieces of vegetables, Calculation is being done, Heating and cooking, Purifies Water, Chopped vegetables, Dirty Clothes, A Music CD, Toasted Bread Slices

NOTE :- Learn and Revise this assignment .

SUBJECT- GK

CLASS III (G.K)

REVISION OF CH. 1, 2, 3

Page No. _____
Date: 01/05/20

NOTE :- Do in rough notebook.

A Answer the following questions :-

1. India is a part of which continent?
2. The great Indian desert 'Thar' is part of which state?
3. Name the northern frontier of India.
4. Who campaigned against social discrimination towards the untouchables?

B Fill in the blanks :-

1. India has derived its name from the river _____
2. A piece of triangular land covered with big water bodies from all the three sides is called a _____
3. _____ are the persons who devote their lives for betterment of society.
4. Bhoodan movement was also known as _____

C MCQs

1. Indian Ocean is in _____ side of India.
a) North b) South
c) East d) West
2. India is the _____ largest country in means of area.
a) 5th b) 6th c) 7th d) 4th