

DATE: 21.8.2020

DAY- FRIDAY

E-CONTENT (HOME ASSIGNMENT)

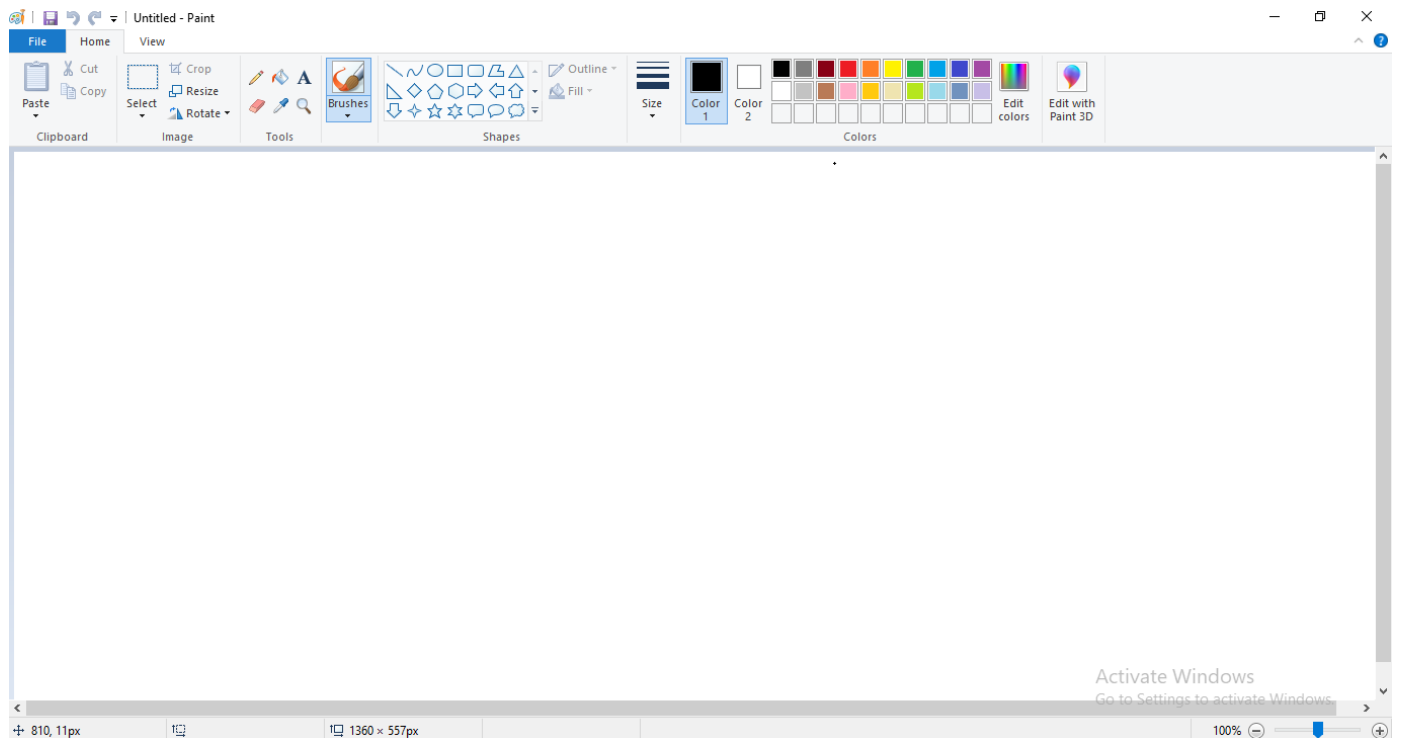
CLASS- II

SUBJECT- COMPUTER

CHAP – 8 MS Paint

Ms Paint helps us to draw and paint on a computer. In order to start Ms Paint we can follow the given steps:

- Click on Start button.
- Click on All Programs.
- Click on Accessories.
- Click on Paint.

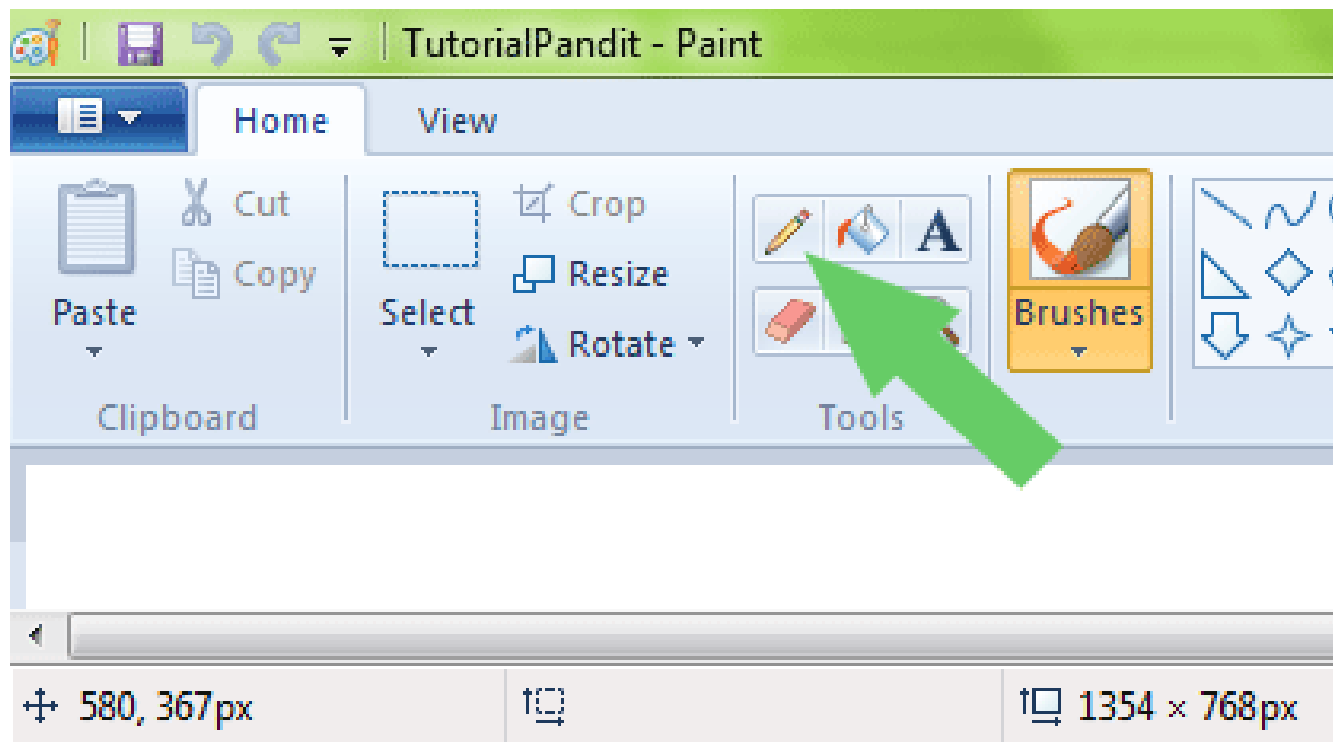


Components of Paint window:

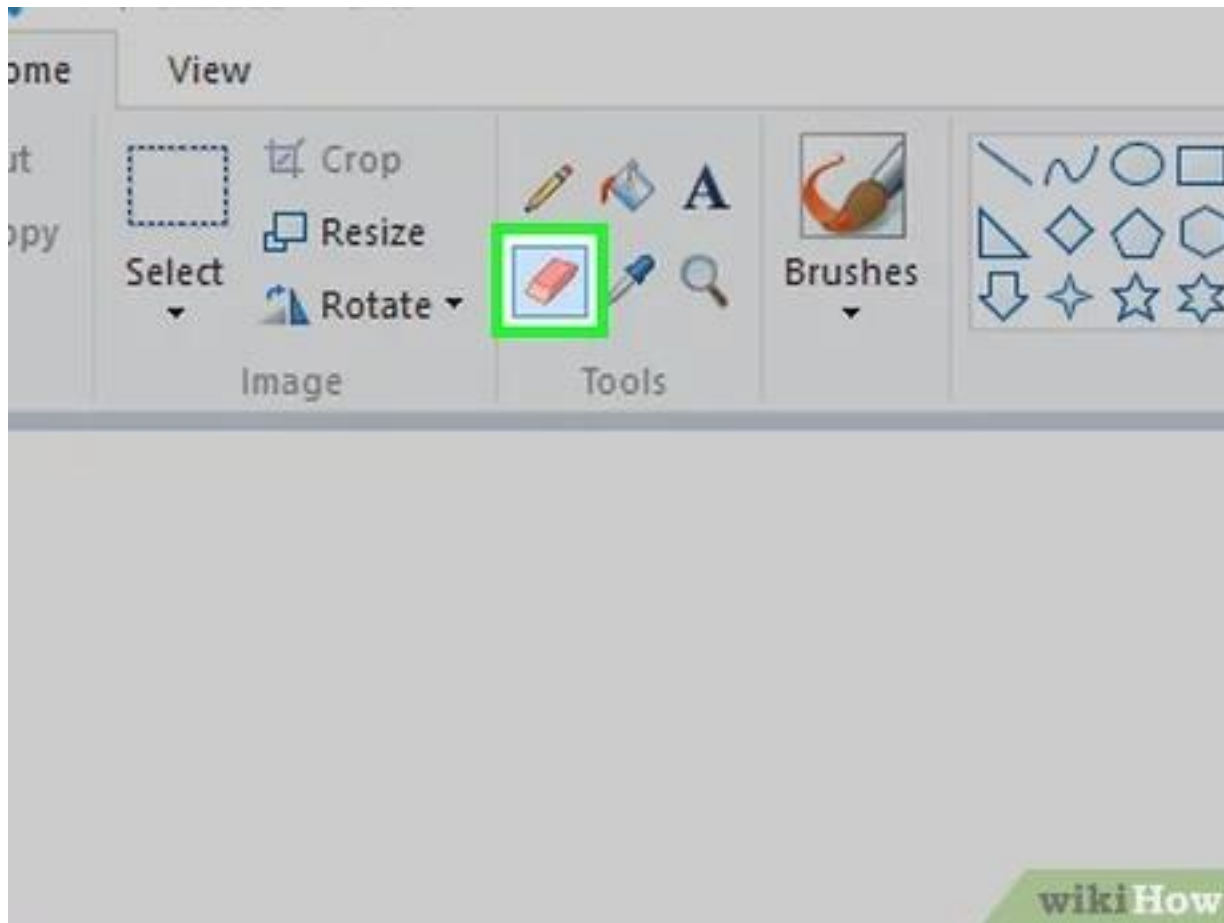
1. Paint button
2. Title bar
3. Drawing Area
4. Ribbon
5. Tabs
6. Groups

Paint Tools: Let's study some tools you already know:

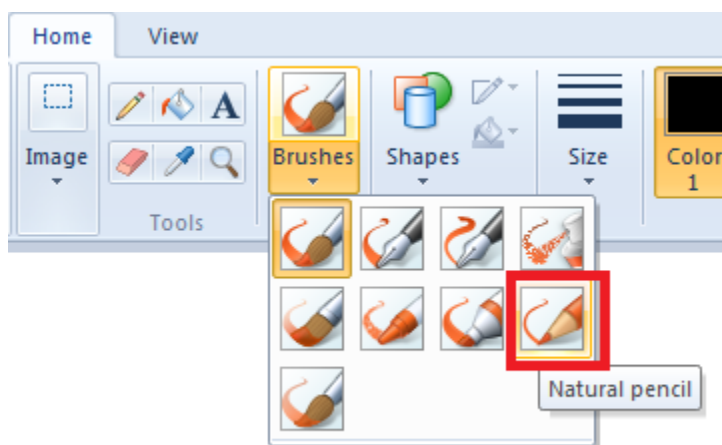
1. Pencil tool: This tool helps us to draw like a real pencil.



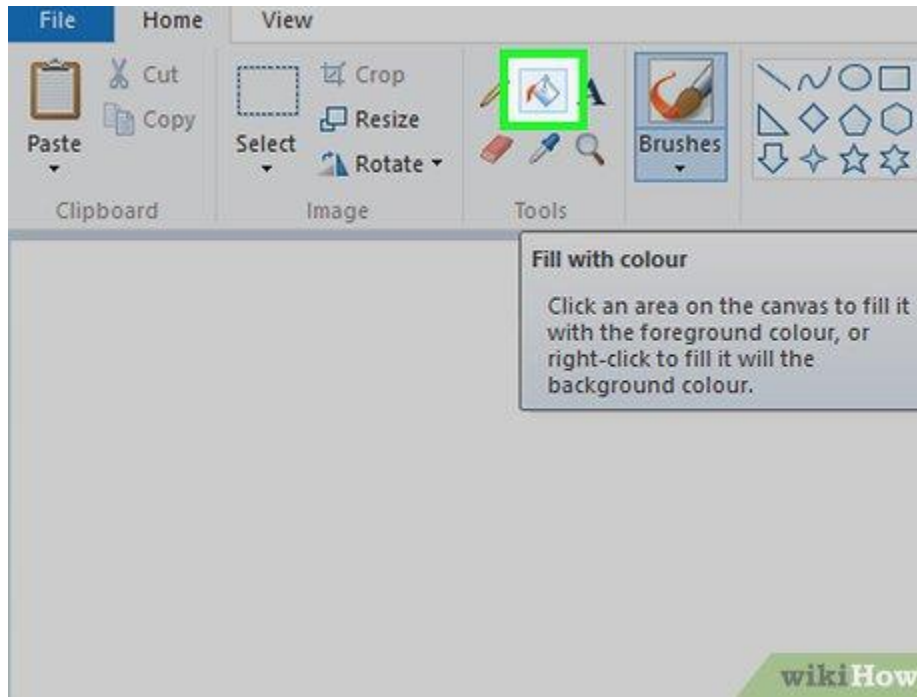
2. Eraser tool: It helps us to erase the unwanted drawing.



3. Brush tool: This tool helps us to draw thick lines.



4. Fill with color tool: This tool is used to fill colors in the drawing.

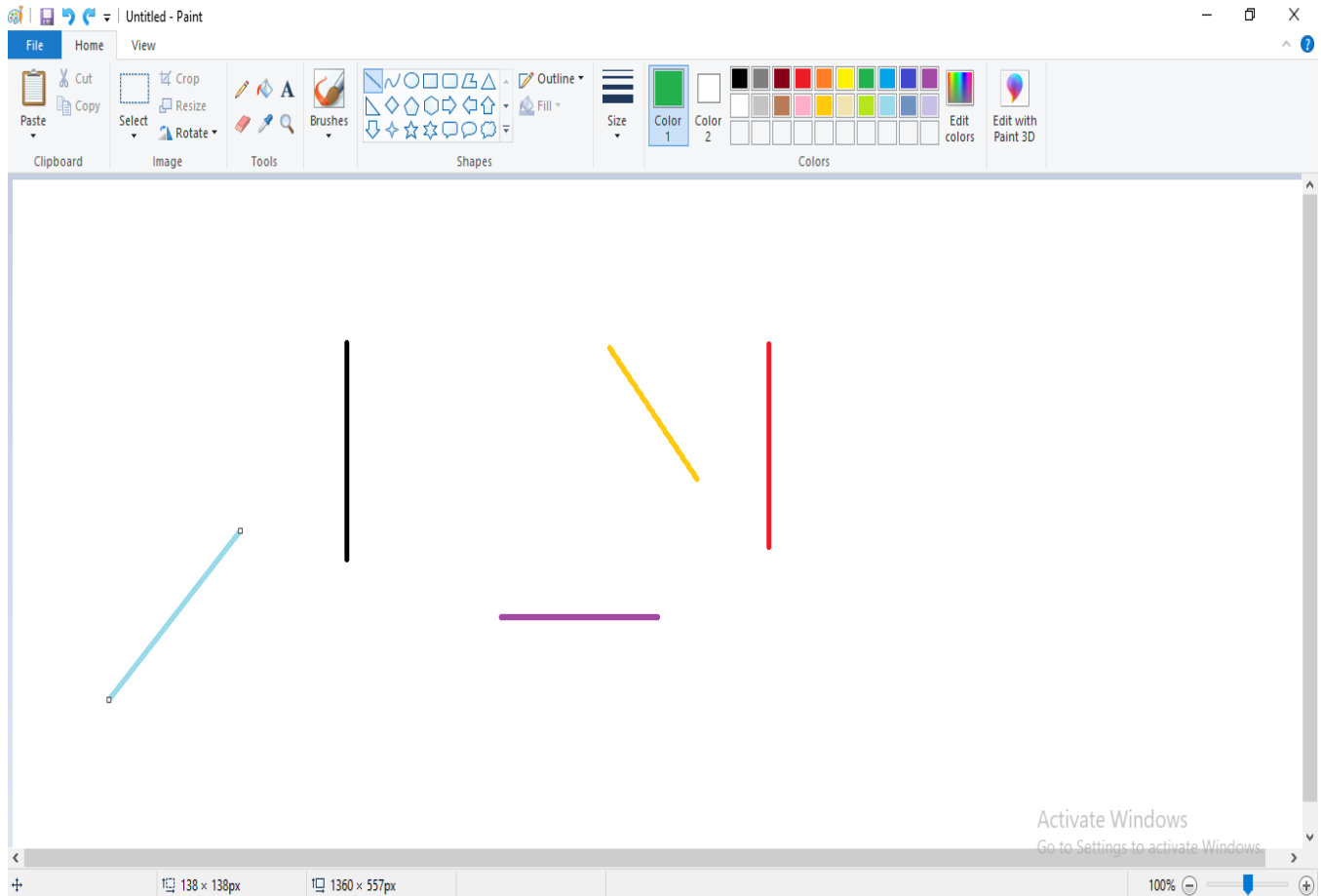


In order to use the tools of Ms Paint, we can follow the following steps:

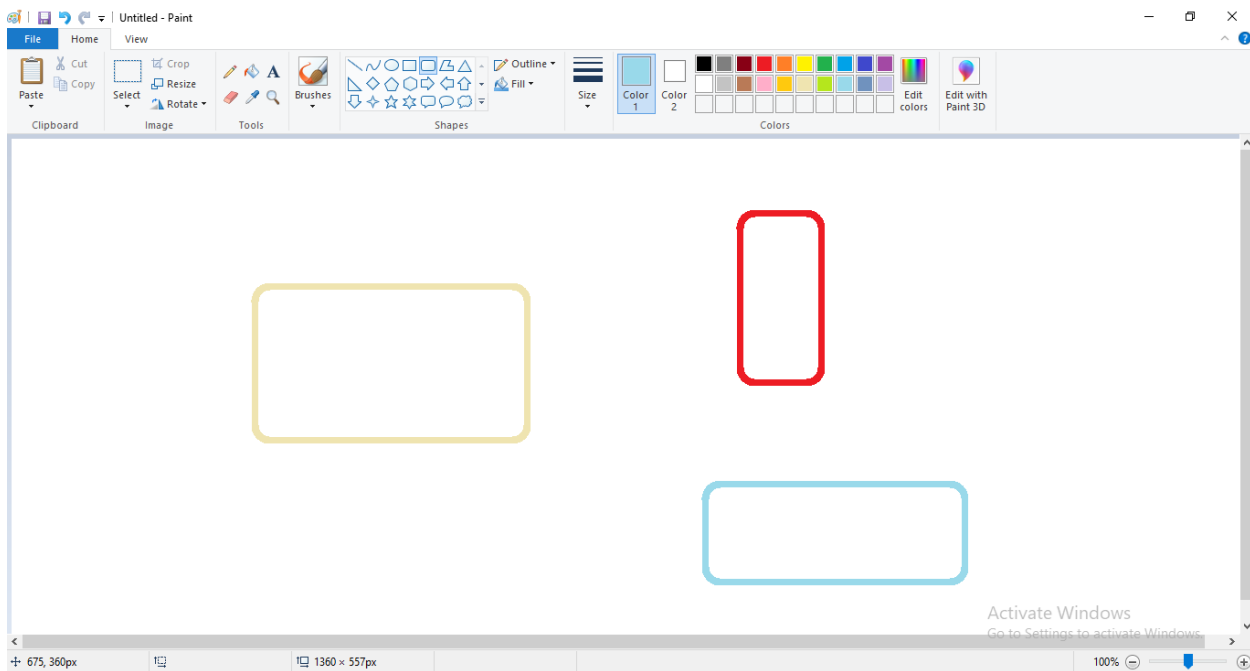
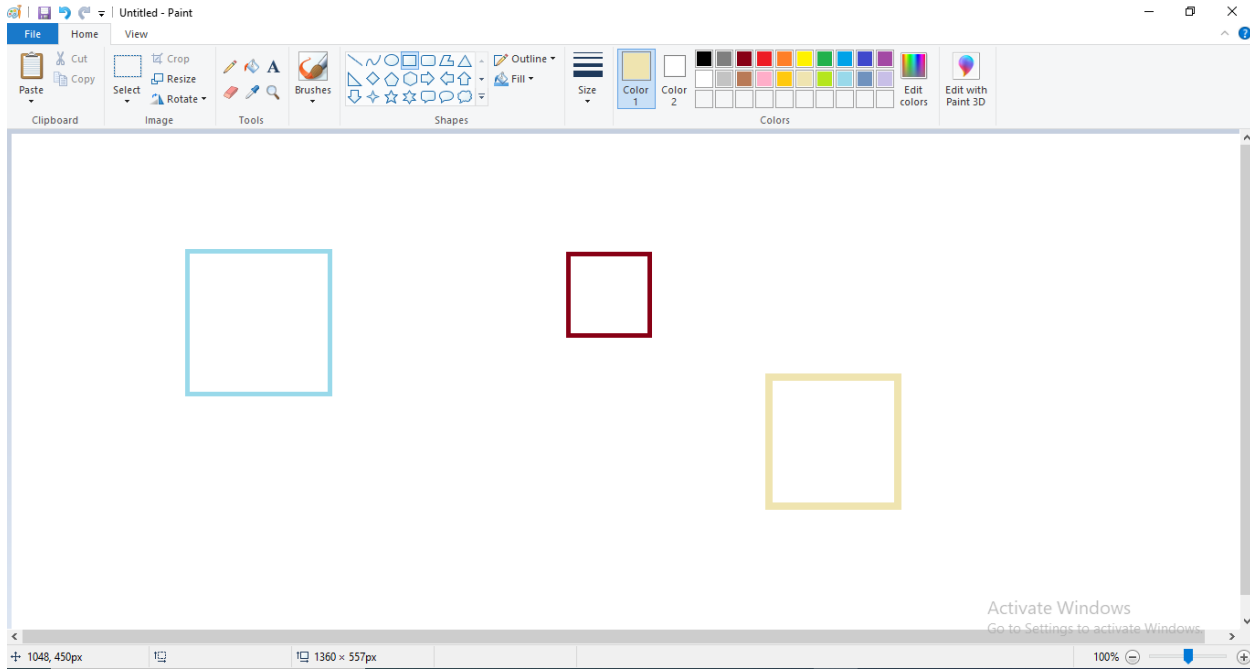
- Place the mouse pointer on any tool. The name of the tool appears.
- Click on it to select the tool.
- Move the mouse pointer to the drawing area.
- Drag the mouse to use the tool for drawing picture.

Tools under Shapes Group:

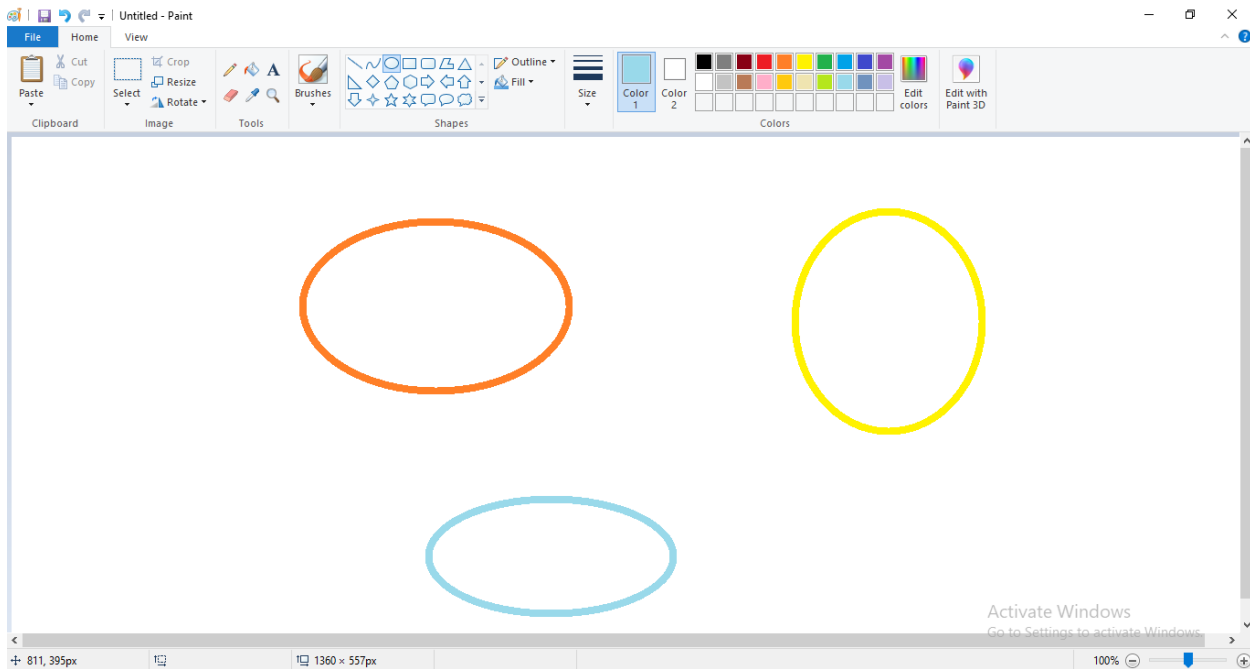
1. Line tool: This tool is used to draw the straight lines.



2. Rectangle and Rounded Rectangle tools: These tools are used to draw squares and rectangles.



3. Oval tool: This tool is used to draw circles and ovals.



Practice questions (not to be done in fair notebook)

1. Which software is used to draw and paint in computer?
2. Name the different components of paint window.
3. _____ tool is used to draw circles and ovals.
4. Name the tool used to draw straight lines.

<https://www.youtube.com/watch?v=q7t0jnHsDqY>

DATE: 21.8.2020

DAY- FRIDAY

SUBJECT- MATHS

Friday

Date 21.8.20

Page No. 1

Ex 3.10 Pg 75

I Do these sums in fair notebook

$$\begin{array}{r} 6. \text{ Total animals} = 2375 \\ \text{no. of cows} = 1999 \\ \text{no. of buffaloes} = \end{array}$$

Ans :-

$$\begin{array}{r} 7. \text{ new tax} = ₹ 4200 \\ \text{Previous tax} = ₹ 3395 \\ \text{Tax increased by} = ₹ \end{array}$$

Ans :-

$$\begin{array}{r} 8. \text{ greater no.} = 2876 \\ \text{smaller no.} = 1989 \\ \text{Difference} = \end{array}$$

Ans :-

DATE: 21.8.2020

DAY- FRIDAY

Friday

Date 21/8/20

Page No. 2

9.	Total students	=	2	3	6	5
	no. of boys	=	1	4	3	9
	no. of girls	=				
	Ans:-					
10	Total seats	=	1	6	0	0
	Persons present	=	1	2	8	7
	Seats vacant	=				
	Ans:-					
II	Write counting	3371 - 3400				

<https://www.youtube.com/watch?v=4g-RlRXgnrU>

DATE: 21.8.2020

DAY- FRIDAY

SUBJECT- EVS

(TEST)

classmate

Date 21.8.20

Page

Class II

SUB - EVS

Answer the following questions:- MM 5x2 = 10

Q1. Why should we eat food?
Ans

Q2. How many meals must we have in a day?
Ans

Q3. Name 2 protective foods.
Ans) 1. _____ 2. _____

Q4. Plants give us cereals like
a) rice b) pea c) Bananas

Q5. People who eat fish, eggs and meat are called
a) Vegetarians b) Non Vegetarians
c) Wrestlers